




Subtraction Word Problem Challenge Cards

Subtraction Word Problem Challenge Cards



There were 12 library books on a shelf, 5 were borrowed. How many were left on the shelf?



Answer:

Subtraction Word Problem Challenge Cards



If you had 9 cupcakes and sold 3, how many would you have left?




Answer:

Subtraction Word Problem Challenge Cards




Maria has 13 strawberries in a bowl, she then eats 7. How many does she have left?



Answer:

There were 20 ducks swimming in a pond but then 9 hopped out. How many were left swimming?




Answer:

Stevie bought 6 drink cans from the shop and gave 4 to his friends. How many does he have left?




Answer:

There were 8 children lined up in a queue, 5 of them were served and sat down. How many children were left in the queue?



Answer:

There were 10 horses eating grass in a field and 5 went back to the stables. How many were left in the field?



Answer:



Subtraction Word Problem Challenge Cards

Lexi was given a bunch of 18 flowers, she split them between 2 vases. In one vase she put 8, how many are left for the other vase?




Answer:

Subtraction Word Problem Challenge Cards



If you had a chocolate bar with 16 pieces and ate 9 pieces, how many pieces would you have left?



Answer:



If you had 9 cupcakes and sold 3, how many would you have left?

Answer:

6



Maria has 13 strawberries in a bowl, she then eats 7. How many does she have left?

Answer:

6



There were 12 library books on a shelf, 5 were borrowed. How many were left on the shelf?

Answer:

7



There were 20 ducks swimming in a pond but then 9 hopped out. How many were left swimming?

Answer:

11



There were 8 children lined up in a queue, 5 of them were served and sat down. How many children were left in the queue?

Answer:

3



There were 10 horses eating grass in a field and 5 went back to the stable. How many were left in the field?

Answer:

5



Stevie bought 6 drink cans from the shop and gave 4 to his friends. How many does he have left?

Answer:

2



Lexi was given a bunch of 18 flowers, she split them between 2 vases. In one vase she put 8, how many are left for the other vase?

Answer:

10



If you had a chocolate bar with 16 pieces and ate 9 pieces, how many pieces would you have left?

Answer:

7